


Prénom :

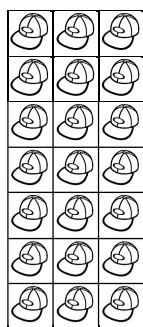
Date :

LA MULTIPLICATION (4)


1- **Écris** un calcul pour compter le nombre d'objets.




.....



.....

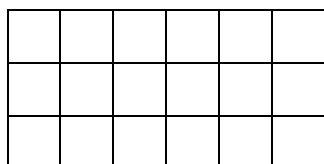


.....

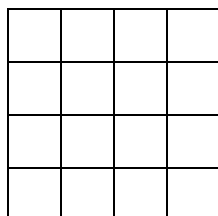


.....

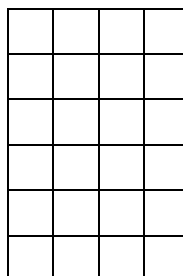
2- **Écris** un calcul pour compter le nombre de carreaux.



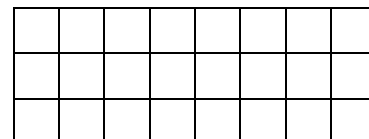
.....



.....



.....



.....

3- **Entoure** la multiplication qui permet de compter les carreaux.


$7 \times 16 = 112$

$10 \times 11 = 110$


$15 \times 8 = 120$

$9 \times 12 = 111$

$10 \times 13 = 130$



4- **Combien** de carrés y avait-il en tout avant que la tablette ne se fasse croquer ?



Calcul:

Il y avait carrés en tout.